



# Pious Mission School, Arwal

*"Practice Examination"*

Session : 2020-21

Time : 1 Hrs

F.M : 40M

Sub : Maths

Class : U.K.G

Name : \_\_\_\_\_ Sec : \_\_\_\_\_ Roll No : \_\_\_\_\_



Examiner's Sign




Mark's Obtained




Invigilator's Sign

**Q. A) Draw the shapes of the following. (10)**


Circle




Square




Rectangle



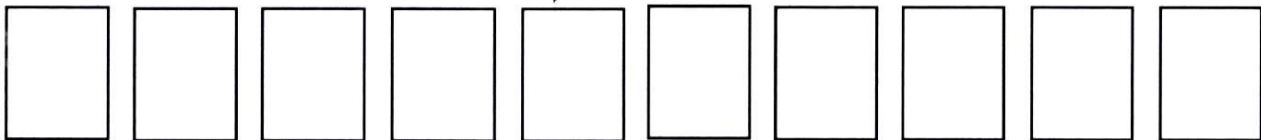
Heart



Triangle



**Q. B) Write the table of "3". (10)**



**Q. C) Fill in the blanks. (10)**

Sh \_\_\_\_\_ p \_\_\_\_\_

C \_\_\_\_\_ n \_\_\_\_\_

S \_\_\_\_\_ a \_\_\_\_\_

Cr \_\_\_\_\_ cen \_\_\_\_\_

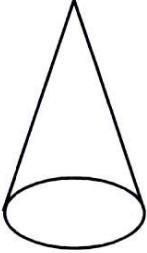
Di \_\_\_\_\_ m \_\_\_\_\_ nd

**Q. D) Write name of the following shapes.**


**(10)**



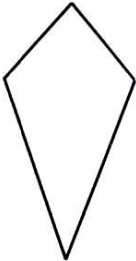
---



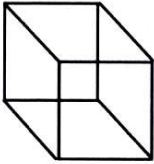
---



---



---



---

